


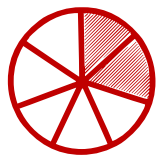
Matching pictures to a fraction

Which shape of each fraction is correct? Circle the correct answer.

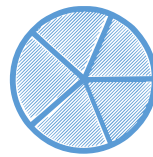
$$\frac{2}{3}$$




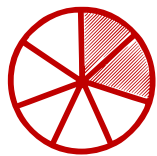
$$\frac{5}{8}$$



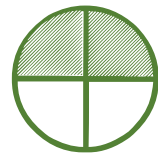

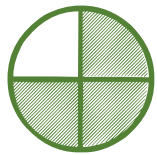
$$\frac{2}{8}$$



$$\frac{0}{5}$$



$$\frac{3}{4}$$



$$\frac{1}{5}$$

