












Fraction numerator and denominator

Look at the shape and write fraction of each shape.

$\frac{\square}{\square}$ 	$\frac{\square}{\square}$ 
$\frac{\square}{\square}$ 	$\frac{\square}{\square}$ 
$\frac{\square}{\square}$ 	$\frac{\square}{\square}$ 
$\frac{\square}{\square}$ 	$\frac{\square}{\square}$ 
$\frac{\square}{\square}$ 	$\frac{\square}{\square}$ 
$\frac{\square}{\square}$ 	$\frac{\square}{\square}$ 