


Matching fractions to a picture

Choose the fraction that represents the part of the shaded object.

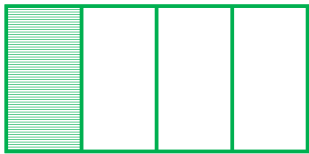


$\frac{2}{3}$

$\frac{1}{3}$

$\frac{3}{3}$

$\frac{2}{3}$




$\frac{1}{2}$

$\frac{1}{3}$

$\frac{1}{4}$

$\frac{2}{3}$




$\frac{2}{3}$

$\frac{3}{2}$

$\frac{1}{2}$

$\frac{3}{4}$




$\frac{2}{3}$

$\frac{3}{3}$

$\frac{1}{3}$

$\frac{2}{2}$




$\frac{2}{3}$

$\frac{2}{4}$

$\frac{1}{3}$

$\frac{3}{3}$



$\frac{2}{3}$

$\frac{1}{4}$

$\frac{1}{2}$

$\frac{1}{3}$