
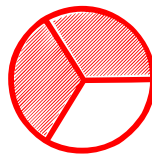



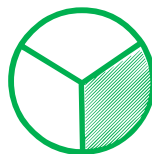
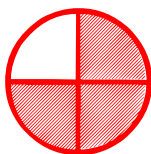
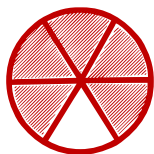
Matching pictures to a fraction

Which shape of each fraction is correct? Circle the correct answer.



$$\frac{5}{7}$$



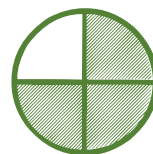
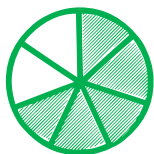
$$\frac{1}{4}$$



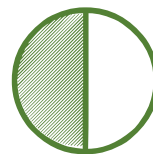

$$\frac{5}{8}$$



$$\frac{5}{7}$$



$$\frac{2}{4}$$



$$\frac{7}{8}$$

