
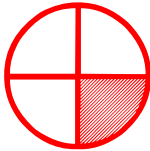
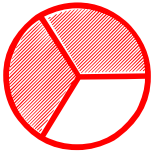






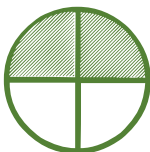



# Fraction numerator and denominator

---

Look at the shape and write fraction of each shape.

$\frac{\square}{\square}$		$\frac{\square}{\square}$	
$\frac{\square}{\square}$		$\frac{\square}{\square}$	
$\frac{\square}{\square}$		$\frac{\square}{\square}$	
$\frac{\square}{\square}$		$\frac{\square}{\square}$	
$\frac{\square}{\square}$		$\frac{\square}{\square}$	
$\frac{\square}{\square}$		$\frac{\square}{\square}$	