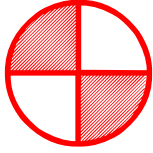


Matching fractions to a picture

Choose the fraction that represents the part of the shaded object.



$\frac{1}{2}$

$\frac{1}{3}$

$\frac{2}{4}$

$\frac{3}{4}$




$\frac{1}{3}$

$\frac{2}{3}$

$\frac{1}{4}$

$\frac{2}{3}$



$\frac{1}{4}$

$\frac{2}{4}$

$\frac{3}{4}$

$\frac{4}{4}$



$\frac{3}{4}$

$\frac{1}{4}$

$\frac{2}{4}$

$\frac{1}{2}$




$\frac{1}{4}$

$\frac{1}{4}$

$\frac{3}{4}$

$\frac{2}{4}$



$\frac{1}{3}$

$\frac{2}{4}$

$\frac{1}{3}$

$\frac{2}{3}$