

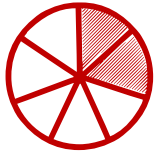



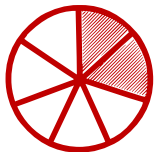
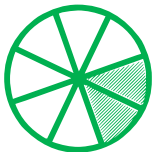
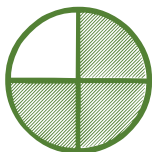





# Fraction numerator and denominator

---

Look at the shape and write fraction of each shape.

|                           |   |                           |   |
|---------------------------|---|---------------------------|---|
| $\frac{\square}{\square}$ |    | $\frac{\square}{\square}$ |    |
| $\frac{\square}{\square}$ |    | $\frac{\square}{\square}$ |    |
| $\frac{\square}{\square}$ |   | $\frac{\square}{\square}$ |   |
| $\frac{\square}{\square}$ |  | $\frac{\square}{\square}$ |  |
| $\frac{\square}{\square}$ |  | $\frac{\square}{\square}$ |  |
| $\frac{\square}{\square}$ |  | $\frac{\square}{\square}$ |  |