

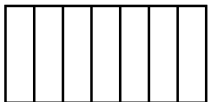




## Fractions: Understanding the fractions notations

Fill out the following table.

	fraction	Numerator (Dividend)	Denominator (Divisor)	Fraction in words	graphical representation
a)	$\frac{2}{3}$	2	3	two thirds	
b)		1	4		
c)				three fifths	
d)					
e)		3			
f)	$\frac{\square}{5}$	2			
g)	$\frac{2}{\square}$		5		
h)	$\frac{3}{\square}$			.... quarters	
i)				five .....	
j)	$\frac{3}{\square}$				
k)		4		..... sixths	