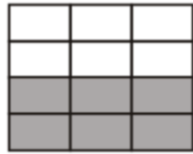


Fractions: Equivalent fractions

Find any three equivalent fractions that correspond to the shaded part.

Example:



$\frac{1}{2}$ or $\frac{2}{4}$ or $\frac{3}{6}$

a)




b)



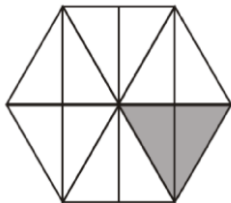
c)



d)



e)



f)

