





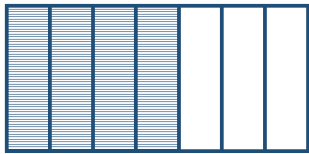





Identifying Fractions

Choose the correct fraction represented in shape.

	$\frac{4}{6}$		$\frac{1}{2}$
	$\frac{2}{4}$		$\frac{2}{3}$
	$\frac{1}{3}$		$\frac{1}{5}$
	$\frac{3}{4}$		$\frac{3}{3}$
	$\frac{5}{5}$		$\frac{3}{4}$
	$\frac{1}{4}$		$\frac{6}{6}$
	$\frac{4}{7}$		$\frac{1}{2}$
	$\frac{2}{4}$		$\frac{2}{2}$
	$\frac{2}{4}$		$\frac{1}{3}$
	$\frac{3}{2}$		$\frac{2}{5}$