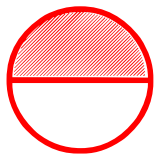


## Fraction as a Part of Whole

---

Choose the fraction that represents the part of the shaded object.




$\frac{1}{2}$

$\frac{2}{3}$

$\frac{1}{4}$

$\frac{1}{3}$

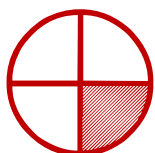


$\frac{1}{3}$

$\frac{2}{3}$

$\frac{3}{3}$

$\frac{1}{4}$



$\frac{1}{2}$

$\frac{1}{4}$

$\frac{1}{3}$

$\frac{2}{3}$

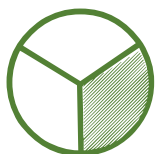


$\frac{1}{4}$

$\frac{2}{3}$

$\frac{2}{3}$

$\frac{1}{2}$

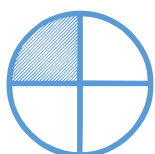


$\frac{1}{3}$

$\frac{2}{3}$

$\frac{1}{4}$

$\frac{1}{2}$



$\frac{1}{2}$

$\frac{1}{4}$

$\frac{1}{3}$

$\frac{3}{3}$