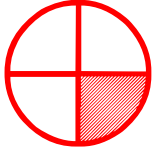


## Fraction as a Part of Whole

---

Choose the fraction that represents the part of the shaded object.




$\frac{1}{3}$

$\frac{2}{3}$

$\frac{1}{2}$

$\frac{1}{4}$ 

---



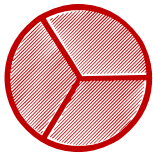
$\frac{1}{4}$

$\frac{1}{2}$

$\frac{1}{3}$

$\frac{3}{3}$ 

---



$\frac{2}{3}$

$\frac{3}{3}$

$\frac{4}{4}$

$\frac{1}{3}$ 

---



$\frac{1}{2}$

$\frac{1}{4}$

$\frac{2}{4}$

$\frac{2}{3}$ 

---



$\frac{1}{2}$

$\frac{1}{3}$

$\frac{1}{4}$

$\frac{2}{3}$ 

---



$\frac{3}{3}$

$\frac{1}{3}$

$\frac{2}{2}$

$\frac{4}{4}$ 

---