


Fraction as a Part of Whole

Choose the fraction that represents the part of the shaded object.

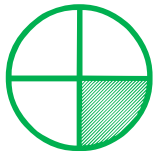


$\frac{1}{2}$

$\frac{3}{3}$

$\frac{1}{4}$

$\frac{2}{3}$

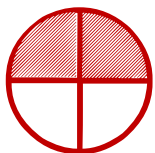


$\frac{2}{3}$

$\frac{1}{4}$

$\frac{1}{2}$

$\frac{1}{2}$



$\frac{2}{3}$

$\frac{2}{4}$

$\frac{1}{4}$

$\frac{2}{2}$



$\frac{2}{3}$

$\frac{1}{3}$

$\frac{1}{4}$

$\frac{3}{3}$

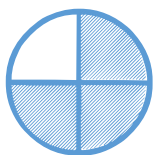


$\frac{2}{4}$

$\frac{1}{3}$

$\frac{2}{3}$

$\frac{1}{2}$



$\frac{1}{4}$

$\frac{2}{4}$

$\frac{3}{4}$

$\frac{4}{4}$