


## Fraction as a Part of Whole

---

Choose the fraction that represents the part of the shaded object.

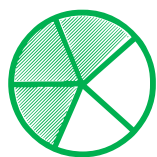


$\frac{3}{5}$

$\frac{3}{4}$

$\frac{4}{5}$

$\frac{1}{5}$



$\frac{3}{5}$

$\frac{2}{5}$

$\frac{4}{5}$

$\frac{5}{5}$



$\frac{1}{5}$

$\frac{2}{5}$

$\frac{3}{5}$

$\frac{3}{4}$



$\frac{2}{5}$

$\frac{1}{4}$

$\frac{1}{5}$

$\frac{3}{5}$




$\frac{2}{3}$

$\frac{5}{5}$

$\frac{4}{5}$

$\frac{0}{5}$



$\frac{3}{4}$

$\frac{4}{4}$

$\frac{5}{5}$

$\frac{4}{5}$