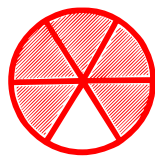


## Fraction as a Part of Whole

---

Choose the fraction that represents the part of the shaded object.




$\frac{1}{2}$

$\frac{3}{4}$

$\frac{5}{6}$

$\frac{1}{6}$



$\frac{2}{6}$

$\frac{5}{6}$

$\frac{6}{6}$

$\frac{1}{6}$



$\frac{2}{5}$

$\frac{1}{6}$

$\frac{3}{6}$

$\frac{2}{6}$



$\frac{3}{6}$

$\frac{2}{6}$

$\frac{4}{6}$

$\frac{6}{6}$




$\frac{2}{6}$

$\frac{3}{6}$

$\frac{4}{6}$

$\frac{4}{5}$



$\frac{2}{6}$

$\frac{5}{6}$

$\frac{6}{6}$

$\frac{5}{5}$