


Fraction as a Part of Whole

Choose the fraction that represents the part of the shaded object.




$\frac{5}{7}$

$\frac{1}{7}$

$\frac{7}{7}$

$\frac{2}{7}$

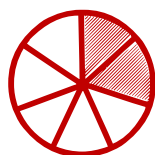


$\frac{2}{7}$

$\frac{1}{7}$

$\frac{2}{7}$

$\frac{6}{6}$



$\frac{3}{6}$

$\frac{2}{7}$

$\frac{3}{7}$

$\frac{1}{7}$



$\frac{2}{5}$

$\frac{3}{7}$

$\frac{1}{7}$

$\frac{2}{7}$



$\frac{2}{7}$

$\frac{3}{7}$

$\frac{4}{7}$

$\frac{3}{7}$



$\frac{5}{7}$

$\frac{5}{6}$

$\frac{3}{5}$

$\frac{3}{7}$