


Fraction as a Part of Whole

Choose the fraction that represents the part of the shaded object.




$$\frac{6}{7}$$

$$\frac{2}{7}$$

$$\frac{3}{7}$$

$$\frac{7}{7}$$




$$\frac{5}{5}$$

$$\frac{6}{6}$$

$$\frac{7}{7}$$

$$\frac{2}{7}$$



$$\frac{2}{7}$$

$$\frac{1}{7}$$

$$\frac{4}{7}$$

$$\frac{3}{7}$$



$$\frac{1}{7}$$

$$\frac{2}{7}$$

$$\frac{3}{7}$$

$$\frac{2}{8}$$

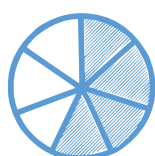


$$\frac{2}{7}$$

$$\frac{3}{7}$$

$$\frac{1}{7}$$

$$\frac{4}{7}$$



$$\frac{2}{7}$$

$$\frac{5}{7}$$

$$\frac{4}{7}$$

$$\frac{3}{5}$$