


## A Fraction is a Part of

---

Choose the fraction that represents the part of the shaded object.




$$\frac{5}{8}$$

$$\frac{6}{8}$$

$$\frac{7}{8}$$

$$\frac{3}{8}$$

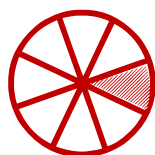


$$\frac{1}{8}$$

$$\frac{7}{8}$$

$$\frac{8}{8}$$

$$\frac{1}{8}$$



$$\frac{2}{8}$$

$$\frac{1}{8}$$

$$\frac{3}{8}$$

$$\frac{3}{6}$$



$$\frac{2}{8}$$

$$\frac{3}{8}$$

$$\frac{1}{8}$$

$$\frac{2}{8}$$



$$\frac{2}{6}$$

$$\frac{2}{7}$$

$$\frac{2}{8}$$

$$\frac{4}{8}$$



$$\frac{6}{8}$$

$$\frac{5}{8}$$

$$\frac{4}{8}$$

$$\frac{7}{8}$$