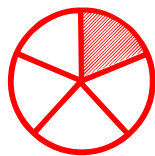


## A Fraction is a Part of

---

Choose the fraction that represents the part of the shaded object.




$\frac{1}{5}$

$\frac{3}{5}$

$\frac{4}{5}$

$\frac{1}{8}$

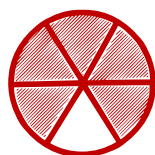


$\frac{4}{5}$

$\frac{3}{5}$

$\frac{5}{5}$

$\frac{3}{8}$



$\frac{2}{6}$

$\frac{5}{6}$

$\frac{2}{8}$

$\frac{5}{8}$



$\frac{2}{7}$

$\frac{2}{8}$

$\frac{2}{6}$

$\frac{7}{8}$



$\frac{5}{8}$

$\frac{4}{8}$

$\frac{3}{8}$

$\frac{5}{7}$



$\frac{3}{8}$

$\frac{2}{8}$

$\frac{4}{8}$

$\frac{5}{8}$