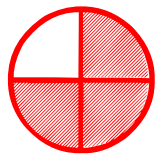


## A Fraction is a Part of

---

Choose the fraction that represents the part of the shaded object.

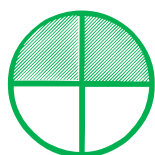


$\frac{1}{4}$

$\frac{2}{4}$

$\frac{3}{4}$

$\frac{4}{7}$




$\frac{2}{4}$

$\frac{3}{4}$

$\frac{1}{4}$

$\frac{4}{7}$



$\frac{1}{5}$

$\frac{5}{7}$

$\frac{6}{7}$

$\frac{1}{6}$



$\frac{4}{4}$

$\frac{6}{6}$

$\frac{5}{5}$

$\frac{1}{3}$



$\frac{2}{7}$

$\frac{6}{7}$

$\frac{7}{6}$

$\frac{1}{5}$



$\frac{3}{8}$

$\frac{2}{8}$

$\frac{1}{8}$

$\frac{1}{3}$