


Matching fractions to picture

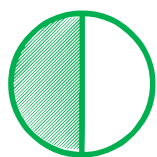
Which fraction of each shape is correct? Circle the correct answer.



$\frac{1}{2}$

$\frac{2}{1}$

$\frac{2}{2}$



$\frac{1}{3}$

$\frac{1}{2}$


$\frac{2}{1}$



$\frac{2}{1}$

$\frac{1}{3}$


$\frac{1}{2}$



$\frac{0}{2}$

$\frac{1}{3}$


$\frac{1}{2}$



$\frac{1}{4}$

$\frac{1}{8}$

$\frac{1}{4}$



$\frac{1}{2}$

$\frac{1}{3}$

$\frac{1}{4}$