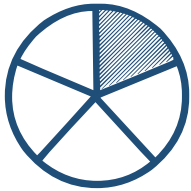
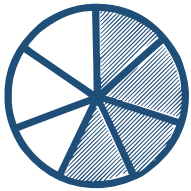
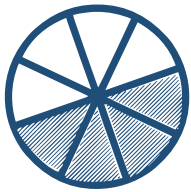
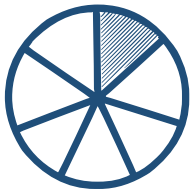
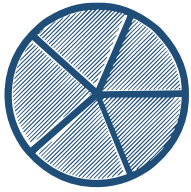



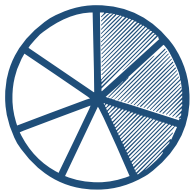



# Identifying Fractions

Choose the correct fraction represented in shape.

	$\frac{2}{5}$		$\frac{4}{7}$
	$\frac{1}{5}$		$\frac{3}{7}$
	$\frac{3}{7}$		$\frac{1}{7}$
	$\frac{4}{8}$		$\frac{2}{7}$
	$\frac{5}{5}$		$\frac{3}{7}$
	$\frac{4}{4}$		$\frac{2}{7}$
	$\frac{7}{8}$		$\frac{4}{8}$
	$\frac{5}{8}$		$\frac{3}{8}$
	$\frac{3}{7}$		$\frac{2}{6}$
	$\frac{4}{7}$		$\frac{3}{6}$