


## Matching fractions to picture

---


Which fraction of each shape is correct? Circle the correct answer.



$\frac{2}{3}$

$\frac{2}{3}$

$\frac{2}{4}$



$\frac{1}{2}$

$\frac{2}{2}$

$\frac{3}{3}$



$\frac{2}{2}$

$\frac{1}{3}$

$\frac{0}{4}$



$\frac{1}{3}$

$\frac{2}{4}$


$\frac{1}{2}$



$\frac{1}{2}$

$\frac{1}{3}$

$\frac{1}{4}$



$\frac{2}{4}$

$\frac{2}{3}$

$\frac{1}{4}$ 

---