


Matching fractions to picture

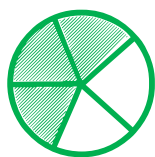
Which fraction of each shape is correct? Circle the correct answer.



$$\frac{3}{5}$$

$$\frac{3}{4}$$

$$\frac{4}{5}$$



$$\frac{3}{5}$$

$$\frac{2}{5}$$

$$\frac{4}{5}$$



$$\frac{1}{5}$$

$$\frac{2}{5}$$

$$\frac{3}{5}$$



$$\frac{2}{5}$$

$$\frac{1}{4}$$


$$\frac{1}{5}$$



$$\frac{2}{3}$$

$$\frac{0}{5}$$

$$\frac{4}{5}$$



$$\frac{3}{4}$$

$$\frac{4}{4}$$

$$\frac{5}{5}$$
