


Matching fractions to picture


Which fraction of each shape is correct? Circle the correct answer.



$\frac{5}{7}$

$\frac{2}{7}$

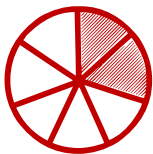
$\frac{7}{7}$



$\frac{2}{7}$

$\frac{1}{7}$

$\frac{2}{7}$



$\frac{3}{6}$

$\frac{2}{7}$

$\frac{3}{7}$



$\frac{2}{5}$

$\frac{3}{7}$

$\frac{1}{7}$



$\frac{2}{7}$

$\frac{3}{7}$

$\frac{4}{7}$



$\frac{5}{7}$

$\frac{5}{6}$

$\frac{3}{5}$