


Matching fractions to picture


Which fraction of each shape is correct? Circle the correct answer.



$$\frac{6}{7}$$

$$\frac{2}{7}$$


$$\frac{3}{7}$$



$$\frac{5}{5}$$

$$\frac{6}{6}$$

$$\frac{7}{7}$$



$$\frac{2}{7}$$

$$\frac{1}{7}$$

$$\frac{3}{7}$$



$$\frac{1}{7}$$

$$\frac{2}{7}$$

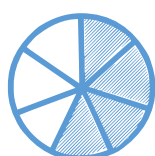
$$\frac{3}{7}$$



$$\frac{2}{7}$$

$$\frac{3}{7}$$

$$\frac{1}{7}$$



$$\frac{2}{7}$$

$$\frac{3}{7}$$

$$\frac{4}{7}$$