


Matching fractions to picture


Which fraction of each shape is correct? Circle the correct answer.



$$\frac{5}{8}$$

$$\frac{6}{8}$$

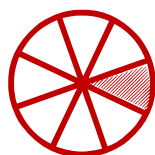
$$\frac{7}{8}$$



$$\frac{1}{8}$$

$$\frac{7}{8}$$

$$\frac{8}{8}$$



$$\frac{2}{8}$$

$$\frac{1}{8}$$

$$\frac{3}{8}$$



$$\frac{2}{8}$$

$$\frac{3}{8}$$

$$\frac{1}{8}$$



$$\frac{2}{6}$$

$$\frac{2}{7}$$

$$\frac{2}{8}$$



$$\frac{6}{8}$$

$$\frac{5}{8}$$

$$\frac{4}{8}$$
