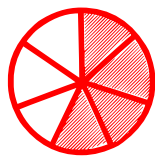


Matching fractions to picture


Which fraction of each shape is correct? Circle the correct answer.



$$\frac{3}{7}$$

$$\frac{4}{7}$$

$$\frac{5}{7}$$



$$\frac{5}{7}$$

$$\frac{5}{8}$$


$$\frac{5}{6}$$



$$\frac{2}{2}$$

$$\frac{1}{2}$$


$$\frac{1}{1}$$



$$\frac{2}{5}$$

$$\frac{4}{5}$$

$$\frac{5}{5}$$



$$\frac{4}{4}$$

$$\frac{8}{8}$$

$$\frac{6}{6}$$



$$\frac{2}{5}$$

$$\frac{6}{7}$$

$$\frac{4}{7}$$