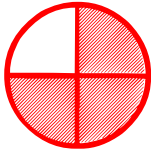


Matching fractions to picture

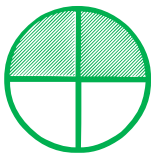
Which fraction of each shape is correct? Circle the correct answer.



$\frac{1}{4}$

$\frac{2}{4}$


$\frac{3}{4}$



$\frac{2}{4}$

$\frac{3}{4}$


$\frac{1}{4}$



$\frac{1}{5}$

$\frac{5}{7}$

$\frac{6}{7}$



$\frac{4}{4}$

$\frac{6}{6}$

$\frac{5}{5}$



$\frac{2}{7}$

$\frac{6}{7}$

$\frac{7}{6}$



$\frac{3}{8}$

$\frac{2}{8}$

$\frac{1}{8}$