


Matching fractions to picture


Which fraction of each shape is correct? Circle the correct answer.



$\frac{3}{7}$

$\frac{4}{7}$


$\frac{5}{7}$



$\frac{5}{7}$

$\frac{4}{7}$

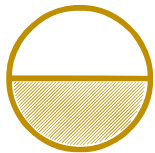
$\frac{3}{7}$



$\frac{2}{6}$

$\frac{1}{6}$

$\frac{5}{6}$



$\frac{1}{2}$

$\frac{1}{3}$


$\frac{1}{4}$



$\frac{1}{3}$

$\frac{1}{5}$

$\frac{1}{4}$



$\frac{1}{2}$

$\frac{1}{3}$

$\frac{1}{4}$