


## Matching fractions to picture

---

Which fraction of each shape is correct? Circle the correct answer.



$$\frac{6}{8}$$

$$\frac{7}{8}$$


$$\frac{6}{7}$$



$$\frac{1}{5}$$

$$\frac{2}{5}$$

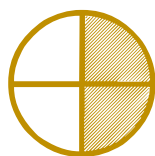
$$\frac{3}{5}$$



$$\frac{3}{8}$$

$$\frac{6}{6}$$


$$\frac{8}{8}$$



$$\frac{1}{4}$$

$$\frac{2}{4}$$

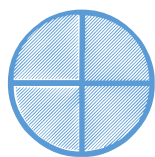
$$\frac{1}{5}$$



$$\frac{1}{2}$$

$$\frac{1}{3}$$

$$\frac{1}{5}$$



$$\frac{3}{4}$$

$$\frac{4}{4}$$

$$\frac{5}{4}$$