


Matching fractions to picture


Which fraction of each shape is correct? Circle the correct answer.



$\frac{1}{2}$

$\frac{2}{2}$


$\frac{3}{3}$



$\frac{1}{6}$

$\frac{1}{7}$


$\frac{1}{8}$



$\frac{5}{6}$

$\frac{4}{6}$


$\frac{4}{5}$



$\frac{5}{6}$

$\frac{3}{6}$

$\frac{4}{6}$



$\frac{5}{5}$

$\frac{6}{5}$

$\frac{7}{7}$



$\frac{1}{2}$

$\frac{1}{3}$

$\frac{1}{4}$