



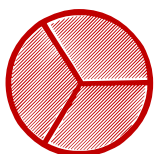
Matching pictures to a fraction

Which shape of each fraction is correct? Circle the correct answer.


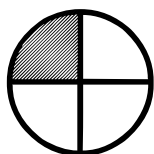
$$\frac{2}{3}$$





$$\frac{0}{2}$$



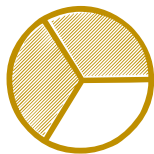
$$\frac{1}{3}$$



$$\frac{2}{3}$$



$$\frac{2}{2}$$



$$\frac{0}{2}$$

