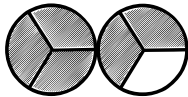
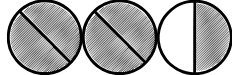




Fractions: Understanding the improper fractions notations

Fill out the following table.

| | fraction | Numerator (Dividend) | Denominator (Divisor) | Fraction in words | graphical representation |
|----|---------------|-------------------------|--------------------------|-------------------|---|
| a) | $\frac{5}{3}$ | 5 | 3 | five quarters |  |
| b) | | 5 | 2 | | |
| c) | | | | seven quarter | |
| d) | | | | |  |
| e) | $\frac{4}{5}$ | | | | |
| f) | $\frac{6}{2}$ | | | | |
| g) | $\frac{6}{3}$ | | | | |
| h) | | | | four halves | |
| i) | | | | seven |  |
| j) | | 7 | | |  |
| k) | | | 3 | six..... | |