


## Matching fractions to a picture

---

Choose the fraction that represents the part of the shaded object.



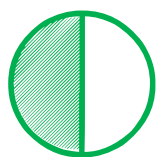
$\frac{1}{2}$

$\frac{2}{1}$

$\frac{2}{2}$

$\frac{1}{3}$ 

---



$\frac{1}{3}$

$\frac{2}{3}$

$\frac{2}{1}$

$\frac{1}{2}$ 

---




$\frac{2}{1}$

$\frac{1}{4}$

$\frac{2}{3}$

$\frac{1}{2}$ 

---




$\frac{0}{2}$

$\frac{1}{3}$

$\frac{1}{2}$

$\frac{0}{4}$ 

---




$\frac{1}{4}$

$\frac{1}{8}$

$\frac{1}{4}$

$\frac{2}{4}$ 

---



$\frac{1}{2}$

$\frac{1}{3}$

$\frac{1}{4}$

$\frac{3}{4}$ 

---