



Identifying Fractions


Choose the correct fraction represented in shape.




$\frac{1}{2}$ $\frac{2}{1}$ $\frac{2}{2}$




$\frac{1}{2}$ $\frac{2}{2}$ $\frac{2}{1}$




$\frac{2}{4}$ $\frac{1}{4}$ $\frac{3}{4}$




$\frac{3}{3}$ $\frac{1}{3}$ $\frac{2}{3}$



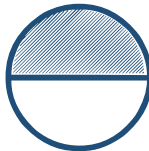
$\frac{1}{4}$ $\frac{2}{4}$ $\frac{3}{4}$



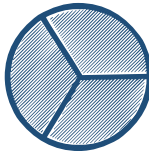
$\frac{1}{2}$ $\frac{2}{3}$ $\frac{3}{2}$




$\frac{1}{4}$ $\frac{3}{4}$ $\frac{2}{4}$



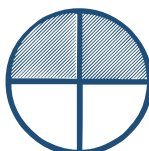
$\frac{1}{2}$ $\frac{2}{4}$ $\frac{3}{2}$



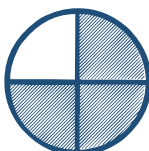
$\frac{1}{2}$ $\frac{3}{4}$ $\frac{4}{3}$



$\frac{1}{4}$ $\frac{3}{4}$ $\frac{2}{4}$



$\frac{1}{2}$ $\frac{2}{4}$ $\frac{3}{2}$



$\frac{1}{2}$ $\frac{3}{4}$ $\frac{4}{3}$