
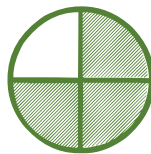


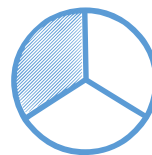
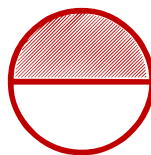

Matching pictures to a fraction

Which shape of each fraction is correct? Circle the correct answer.

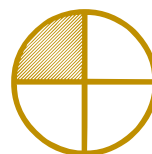
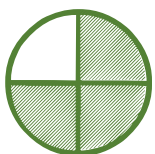
$$\frac{3}{4}$$



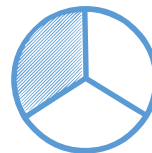

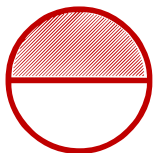
$$\frac{1}{3}$$



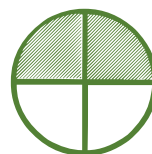
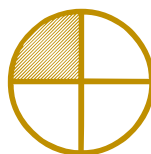

$$\frac{2}{4}$$



$$\frac{1}{3}$$



$$\frac{2}{4}$$



$$\frac{1}{5}$$

