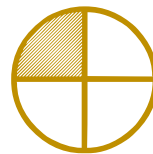


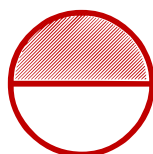

Matching pictures to a fraction

Which shape of each fraction is correct? Circle the correct answer.


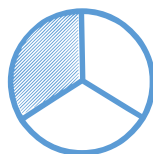

$$\frac{1}{4}$$




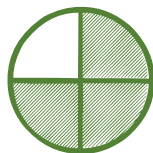

$$\frac{2}{4}$$



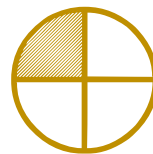

$$\frac{4}{4}$$



$$\frac{3}{3}$$



$$\frac{2}{2}$$



$$\frac{2}{4}$$

