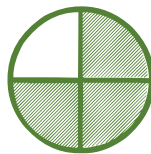
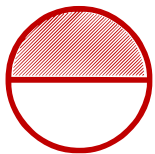


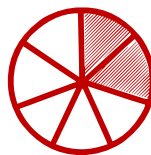

Matching pictures to a fraction

Which shape of each fraction is correct? Circle the correct answer.


$$\frac{1}{4}$$



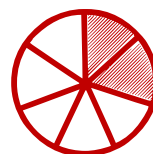

$$\frac{2}{7}$$



$$\frac{4}{6}$$



$$\frac{5}{6}$$



$$\frac{2}{5}$$



$$\frac{1}{6}$$

