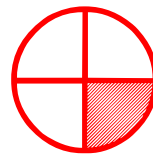




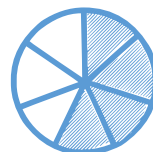

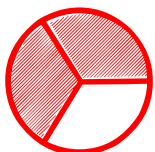
Matching pictures to a fraction

Which shape of each fraction is correct? Circle the correct answer.

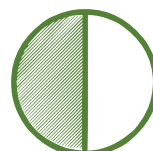
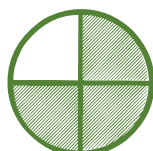
$$\frac{1}{4}$$




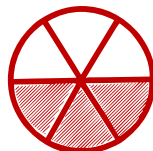
$$\frac{4}{7}$$




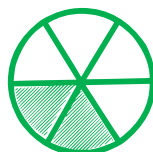
$$\frac{3}{4}$$



$$\frac{4}{4}$$



$$\frac{2}{6}$$



$$\frac{1}{5}$$

