


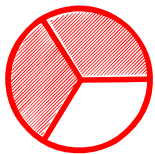
## Matching pictures to a fraction

---

Which shape of each fraction is correct? Circle the correct answer.


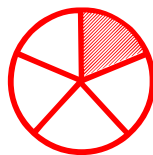
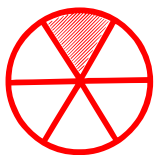
---

$$\frac{1}{3}$$



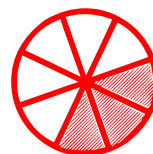
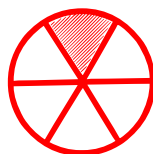
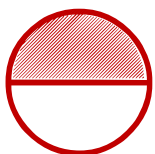
---

$$\frac{5}{5}$$



---

$$\frac{1}{5}$$



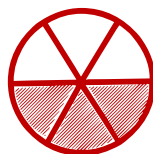
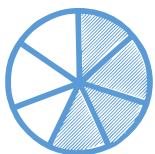
---

$$\frac{3}{7}$$



---

$$\frac{3}{6}$$



---

$$\frac{1}{5}$$

