

## Matching pictures to a fraction

---

Which shape of each fraction is correct? Circle the correct answer.

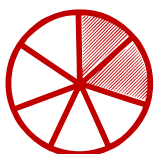
---

$$\frac{2}{3}$$




---

$$\frac{5}{8}$$



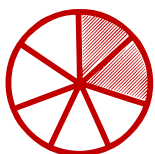
---

$$\frac{2}{8}$$



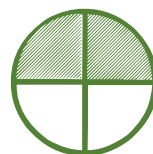
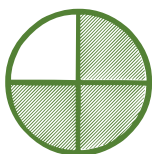
---

$$\frac{0}{5}$$



---

$$\frac{3}{4}$$



---

$$\frac{1}{5}$$

