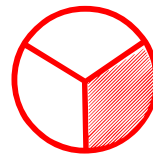
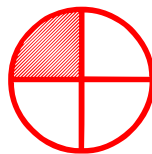




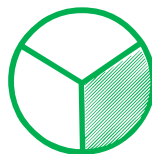

Matching pictures to a fraction

Which shape of each fraction is correct? Circle the correct answer.


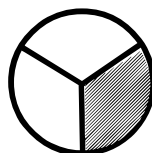
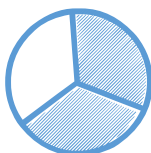
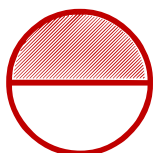
$$\frac{2}{4}$$



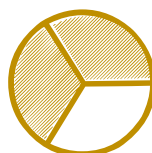

$$\frac{1}{3}$$



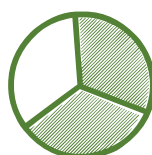

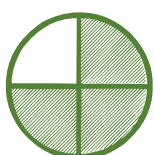
$$\frac{3}{3}$$



$$\frac{2}{2}$$



$$\frac{0}{2}$$



$$\frac{1}{3}$$

