

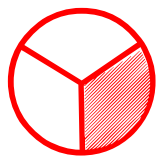





Matching pictures to a fraction

Which shape of each fraction is correct? Circle the correct answer.

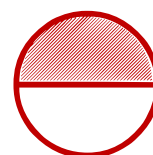


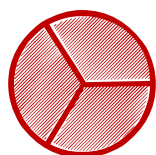
$$\frac{1}{2}$$





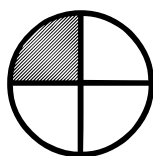
$$\frac{2}{3}$$



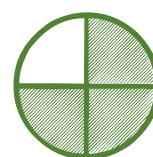
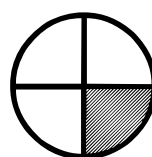

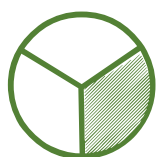
$$\frac{0}{2}$$



$$\frac{1}{3}$$



$$\frac{3}{4}$$



$$\frac{2}{4}$$

