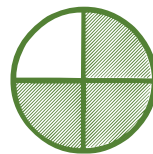
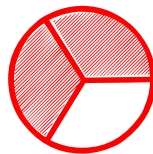



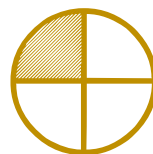


Matching pictures to a fraction

Which shape of each fraction is correct? Circle the correct answer.


$$\frac{3}{4}$$



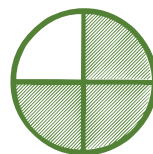
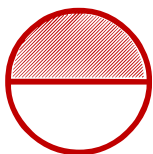

$$\frac{1}{4}$$





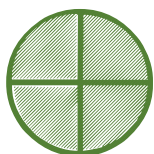
$$\frac{1}{3}$$



$$\frac{3}{4}$$



$$\frac{2}{3}$$



$$\frac{3}{4}$$

