

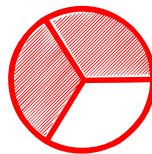


## Matching pictures to a fraction

---

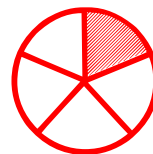
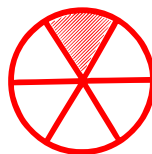

Which shape of each fraction is correct? Circle the correct answer.

---

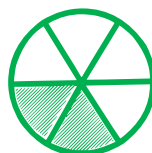
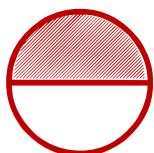
$$\frac{1}{7}$$





$$\frac{1}{5}$$





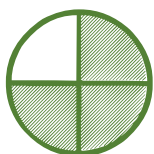
$$\frac{2}{6}$$



$$\frac{0}{5}$$



$$\frac{3}{4}$$



$$\frac{1}{4}$$

