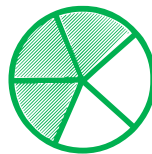
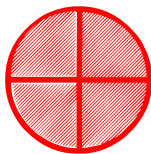
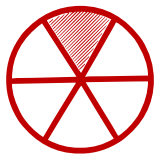


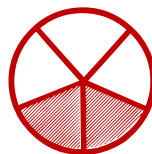

Matching pictures to a fraction

Which shape of each fraction is correct? Circle the correct answer.


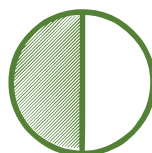
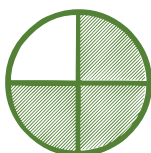
$$\frac{4}{4}$$



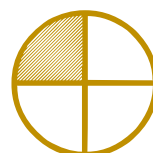
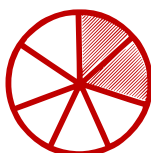
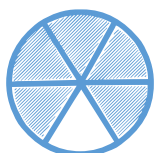
$$\frac{2}{5}$$



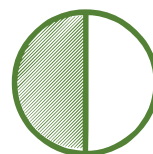

$$\frac{1}{4}$$



$$\frac{0}{5}$$



$$\frac{1}{2}$$



$$\frac{7}{8}$$

