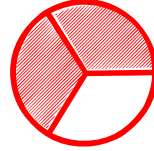
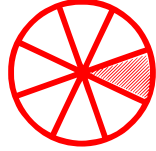



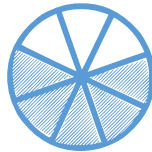
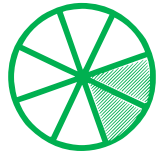
Matching pictures to a fraction

Which shape of each fraction is correct? Circle the correct answer.



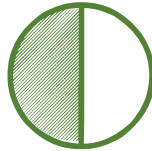

$$\frac{1}{8}$$



$$\frac{5}{8}$$




$$\frac{1}{2}$$



$$\frac{7}{8}$$



$$\frac{1}{3}$$



$$\frac{5}{8}$$

