


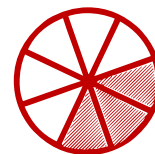

Matching pictures to a fraction

Which shape of each fraction is correct? Circle the correct answer.



$$\frac{8}{8}$$




$$\frac{5}{8}$$



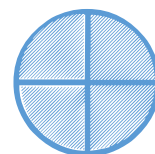
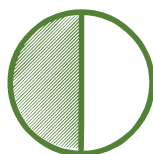
$$\frac{2}{4}$$



$$\frac{5}{8}$$



$$\frac{4}{5}$$



$$\frac{7}{8}$$

