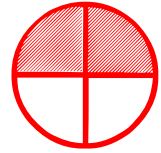
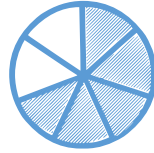




Matching pictures to a fraction

Which shape of each fraction is correct? Circle the correct answer.

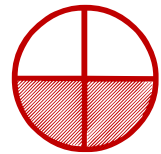
$$\frac{5}{7}$$



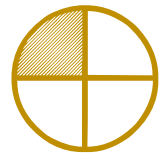


$$\frac{2}{8}$$



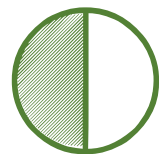
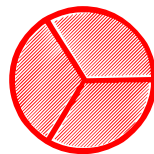
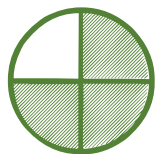
$$\frac{1}{3}$$



$$\frac{6}{6}$$



$$\frac{3}{4}$$



$$\frac{1}{2}$$

